



JUNE 2020

15

Show 68 cents using quarters, dimes, nickels and pennies.

<p>16 Go on a scavenger hunt at home to find 3 solids, 3 liquids, and 1 gas.</p>	<p>17 You have 4 apples and 1 of them is green. Draw them and write a fraction to show how many apples are green.</p>	<p>18 Find as many numbers in your house as you can in 10 minutes. Put the numbers in order from greatest to least.</p>	<p>19 Explain to a friend how you would complete this pattern: 3, 6, 9... Stop at 30.</p>	<p>20 Read out loud to a member of your family for 15 minutes.</p>
<p>21 Measure your height in inches and weigh yourself in pounds. Record for later!</p>	<p>22 Go outside to the same spot 4 to 6 times. Mark the length of your shadow with chalk or a stick. How does it change throughout the day?</p>	<p>23 Write as many problems as you can that have an answer of 15. Example: $7 + 8 = 15$</p>	<p>24 Name the 5 vowels in our alphabet. Create lists of 5 words for each vowel that have the long vowel sound.</p>	<p>25 Write how much money each of these amounts equals. 1 nickel + 4 pennies = _____ 1 dime + 3 pennies = _____ 2 dimes + 1 nickel = _____ 1 dollar + 1 dime = _____</p>
<p>26 Find a map and name the 7 continents.</p> 	<p>27 Write the number that is 2 fewer than 11; 2 fewer than 15; 2 fewer than 13; 2 fewer than 17.</p>	<p>28 How many smaller words can you find in the word: w-a-t-e-r-m-e-l-o-n</p>	<p>29 Find each sum or difference. Watch the signs!</p> <p>$38 + 17 =$ $46 - 17 =$ $86 - 34 =$</p> 	<p>30 Invent a game and write the rules for the game. Teach it to a family member or friend and play the game!</p>

JULY 2020

1



Survey friends and neighbors to find out their favorite flavor of ice cream. Graph the results.

2

Practice spelling sight words by writing words in a tray of sugar or salt with your finger. *Ask an adult for help!*

3

How many ways can you make 28¢ using pennies, nickels, dimes, and quarters?



4

Independence Day!



#IndependenceDay 130102704

Use 3 or more complete sentences to answer this question: How does your community celebrate Independence Day?

5

Use this code: a=1, b=2, c=3, d=4, e=5, f=6, g=7, h=8, i=9, j=10... Z=26. How much is your name worth? Can you find any words worth 100?

6

Go on a walk in the park and then write and draw about what you saw!



7

Estimate the number of steps from your bed to the front door. Record your estimate. Count to get the actual number. Record the actual number. Find the difference between your estimate and the actual.

8

Write a story about your favorite kind of weather. Describe it and tell what you would do on a day with that kind of weather.

9

Get a small bag of M&M's. Estimate how many are in the bag and predict what color will have the most. Open bag and graph the number of each color. How many in all? Were you close?

10

Each day this week, list three activities you do and what time they begin. Don't forget to include a.m. or p.m.

11

Write the numbers for these 5 words:

eighty-three
fifty
seventy-six
sixty-seven
fifteen

12

Make a map of your house. Label each room. Make sure you have a map key on your map.



13

Find foods that are in the shape of circles, triangles, squares and rectangles. List the foods next to their shape.

14



Be a scientist and observe an animal. Write down what you observed and draw the animal.

15


Watch TV for one half hour. Time how long each commercial is. How many total minutes were the commercials?





16

Ask 10 people you know their favorite color. Use tally marks to record your data. Write 3 sentences about the data you collected!

17

What time is it on this clock?



<p>18 Tommy told Tina to take Timmy's tuba.</p>  <p>This sentence is full of words beginning with the T-sound. This is an example of alliteration. Write a sentence of your own with words that begin with the T-sound.</p>	<p>19 Look inside a grocery store flier. Cut out the most expensive item. How much money would you need for 2 of them?</p>	<p>20 Write an Acrostic poem about something you've done with your family. Start each line of your poem with the letter on each line.</p> 	<p>21 Circle all the even numbers: 26, 95, 12, 72, 33, 94, 11, 110, 47.</p> <p>How do you know which ones are even?</p>	
<p>22 Write each of the following letters on a separate index card: f, r, i, e, n, d, s, h, i, p Then use your index cards to make a word.</p>	<p>23</p>  <p>Keep track of the weather for a week. How many sunny days? Rainy days? Cloudy days? How many more days are sunny than rainy?</p>	<p>24 Think about the story you are reading. Write a note to the author telling him/her your favorite part.</p>	<p>25 Find an adult's shoe. Measure the length in inches and centimeters.</p>	<p>26 How many more words can you think of that end with -ug, -ut, or -un? Write them down! As you read today, try to find other words with these endings, and add them to your list.</p>
<p>27 If you see 8 people, how many eyes would you see? If there are 30 toes under the table, how many people are sitting at the table?</p> 	<p>28 Punctuate these sentences correctly: Do you go to school I can count to one hundred Do you like your teacher I walk to school</p>	<p>29 Cut out a picture from a flier or old magazine. Glue to a blank paper. Write a subtraction math story problem for the picture.</p>	<p>30 Select a celebration from a different country. Write a paragraph to describe the celebration.</p>	<p>31 Estimate how many jumping jacks you can do in a minute. Now try it! 😊</p>

AUGUST 2020

1
Read another chapter or the first few pages of a book on your reading list. Think about the beginning of the story. Tell a summary of the book to a family member.

2
Subtract. Then check it with addition.
 $39 - 21 =$
 $62 - 34 =$
 $54 - 46 =$
 $73 - 12 =$

3
Make a collage illustrating a scene from a book you read this summer!

4
I have a machine that adds 5 to every number I put in. If I put in 4, what comes out?
If I put in 16, what comes out?

5
Read a book to someone special



6
How long does the traffic light stay **green**? **Red**?
How could you measure it? How much longer is one light than the other?



7
What are three new words you learned this month?
Write these words, their meanings, and illustrate a picture.

8
Solve:
 $399 + 32 =$
 $209 + 19 =$
 $244 - 22 =$
 $305 - 2 =$

9
Ask a family member to read a newspaper or magazine article to you, if you need help. Then, pick a sentence and see if you can read it aloud like a reporter.


10
Circle the odd numbers.
27, 16, 21, 54, 88, 45, 132, 347, 303. How do you know which ones are odd?

11
Spell as many words as you can, using these 10 letters: **a, l, b, b, c, d, k, l, r, s.**
Divide your paper into 3 columns: 3 letter words, 4 letter words, & 5 or more letters. How many words can you make for each column?

12
Write your phone number. Add the digits.
Is the sum of the digits **MORE** or *less* than 20?
Try your friend's phone number. Whose number has the larger sum?



13
Opposites are all around us! Think about the things you have done today. Write a word or phrase describing what you have done and then the opposite. Example: Run outside. Walk inside



14
Measure your height (inches). Record. Weigh yourself (pounds). Record. Look back at June 21st. How much have you grown?

15
Play Hangman with your family!

<p>16 Find as many circles, squares, and triangles as you can in your bedroom. List the things you find and their shape.</p>	<p>17 If you could create an invention to solve any problem, what would it be? Write about it!</p>	<p>18 Find the patterns. 1,3,5,7,9,____ 2,6,10,14,____ 28,23,18,13, ____</p>	<p>19 Read a recipe with an adult. Explain the steps of the recipe to an adult and why it is important to follow the recipe in order.</p>	<p>20 Estimate the width of your bedroom. Then use a ruler or tape measure and find the actual number. Write down the numbers.</p>	
<p>21 The first day of second grade is coming up soon! Write a story about how you feel about starting school. Also tell what you are most excited about.</p>	<p>22 Count up and back by 5's to 200.</p>	<p>23 Write a fiction story about a child who lives in a make-believe country. Give the country a name and tell where it is located. Describe the child's life.</p>	<p>24 Ben is 42 inches tall. Kim is 58 inches tall. Who is taller? What is the difference of their heights?</p>	<p>25 Punctuate these sentences correctly: I am in the first grade Can you count to one thousand My teacher is nice Do you like your teacher</p>	
<p>26 Show 2 ways to make 89 cents using: 1 quarter, 1 dime, 1 nickel, 1 penny</p>	<p>27 Walk through your house & outside. Write down 3 items inside that are compound words and 3 items outside. Write both words separately and then put the words together. Example: dog + house = doghouse</p>	<p>28 $6 + 4 + 8$ names the same number as $9 + 9$. Write three more number expressions for the amount $9 + 9$.</p>	<p>29 Draw a pizza. Divide your pizza into equal parts so each member of your family gets one slice. How many equal parts are there? Try with two slices!</p>	<p>30 Write a review for a movie you saw this summer. Tell what it was about and why you liked or didn't like it.</p>	<p>31 Congratulations! Your brain continued to grow this summer. You are ready for second grade!</p>

